




1. In this indoor activity, it is the art of folding paper to create figures.


Which picture shows the activity in the sentence?



2. Read the dialogue and answer the question.

Alex : Neymar, do you like playing football?
Neymar : No, not really. I'm bad at playing football.
Alex : What can you do, then? Are you good at playing marbles?
Neymar : No, I am not, but I can play volleyball very well.

Which activity is Neymar good at?



3. Read the conversation and answer the question.

Julia : Hello, Sue. Can I ask some questions? It's my homework.
Sue : Of course, Julia.
Julia : - - - -?
Sue : I am fond playing computer game. I also love playing chess.
Julia : Great! - - - -?
Sue : At the park.
Julia : Great! - - - -?
Sue : My friend is Dennis. He is very good at it.


Which questions does Julia NOT ask Sue?

- A) Which activities do you like doing in your free time
 B) Who likes playing chess
 C) How many people are in the game
 D) Where do you play it

4. Read the sentence and answer the question.

My favorite activities are riding a horse, skipping rope and playing chess.

Which of the following is NOT one of Luna's hobbies according to the sentence above?



5. I. No, I can't.
 II. I can play backgammon.
 III. Can you play chess?
 IV. What can you do?

Find the CORRECT order of the conversation below.

- A) III - I - IV - II
 B) III - I - II - IV
 C) II - I - III - IV
 D) IV - II - III - I

6. Look at the picture and answer the question.



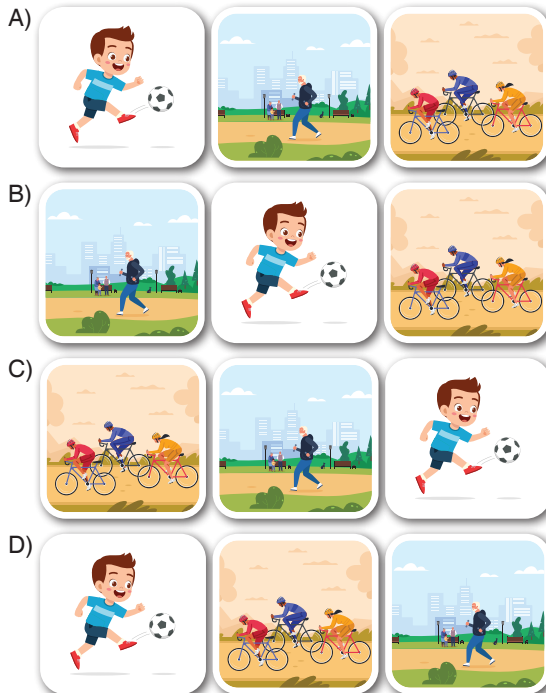
I am interested in ---- and ----.

Fill in the blanks according to the picture.

- A) camping / hiking
B) hiking / fishing
C) camping / roller skating
D) roller skating / fishing

7. My favorite activities are playing football, cycling and walking.

Read the sentence and find the CORRECT order of the pictures.



8. Read the sentence and answer the question.

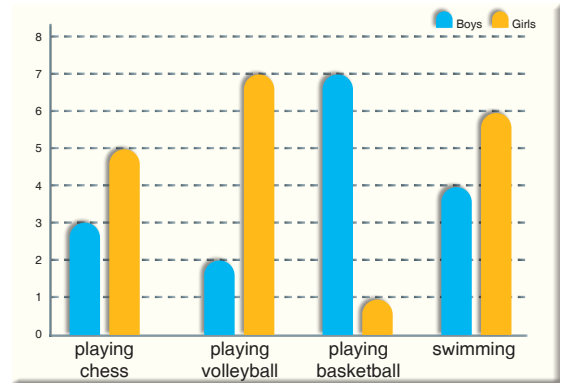
My sister's favorite activity is camping.

Which picture shows my sister's favorite activity?



Answer the questions 9-10 according to the graph.

The graph below shows the number of students that are good at playing games.



9. Which of the following is CORRECT according to the graph?

- A) Playing basketball is not popular among girls.
B) Six girls are good at swimming.
C) Playing chess is very popular among boys.
D) Girls don't like playing volleyball.

10. Ten students can ----.

Complete the sentence according to the graph above.

- A) play chess
B) play volleyball
C) play hopscotch
D) swim