

1.

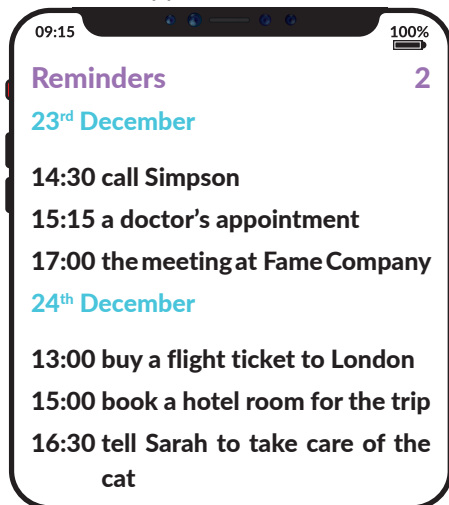


Alex : Hi, Alex is speaking. Can I speak to Marry?
Marry : Hi, Alex. What's up?
Alex : I'm doing well. Well... I received your invitation card, but you didn't write the time.
Marry : Oh! At 4 in the afternoon.
Alex : Sorry, Marry, but I have another plan. I can't join you.
Marry : No problem, Alex.

According to the conversation above, what is Alex's purpose of calling Marry?

- A) Asking for the details
- B) Accepting the invitation
- C) Inviting Marry to his party
- D) Learning the place

2. Harold is a busy businessman. He has a lot of things to do. He uses an application to remember his tasks.



Which of the following questions DOES NOT have an answer in the application?

- A) What will Harold do firstly on 23rd December?
- B) For what purpose does Harold travel to London?
- C) What will Harold do after the doctor's appointment?
- D) What time will Harold call Simpson?



3. Craig is talking about his predictions about the future of the world during his presentation. These are his sentences:

We won't have enough water to drink.

The glaciers will melt because of global warming.

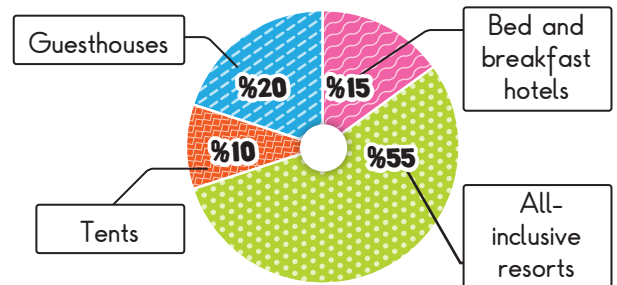
We won't have clean and fresh air.



Keeping in mind Craig's sentences, which of the following pictures should he use during the presentation?

- A) 1-2-4 B) 2-3-5 C) 2-4-6 D) 2-3-4

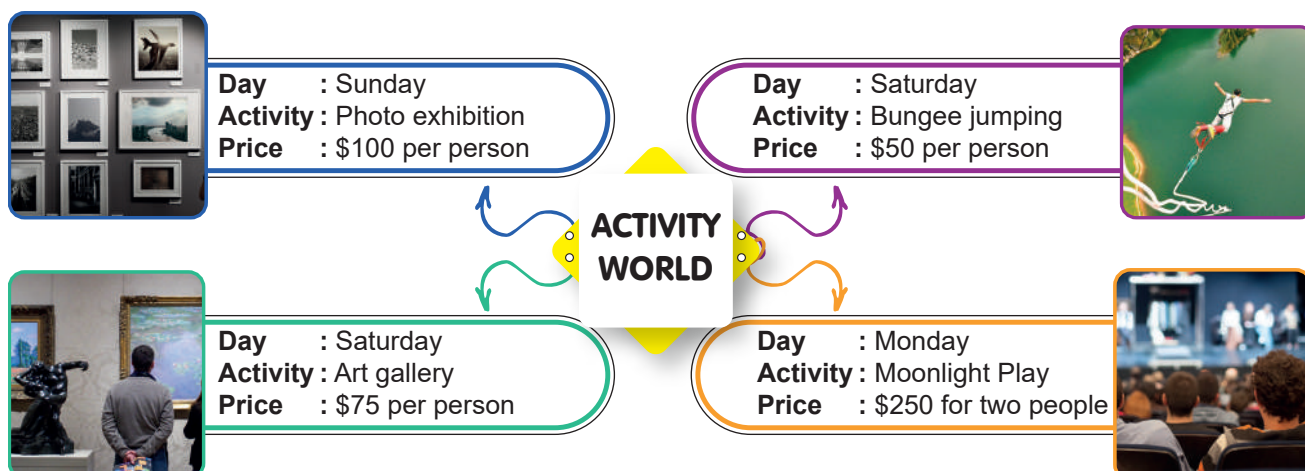
4. In Türkiye, people have different accommodation preferences. Here is the graph of their preferences:



According to the graph above, which of the following is NOT correct?

- A) Most people would rather go camping than stay at a bed and breakfast hotel.
- B) Guesthouses are more preferred than bed and breakfast hotels.
- C) All-inclusive resorts are the most popular choices.
- D) More than half of the people prefer all-inclusive resorts.

5. Here are some weekend activities in the city:



Allen and Sheila are going to do something together at the weekend. Sheila likes exciting outdoor activities, but Allen hates them. Also, Sheila enjoys talking about famous paintings. Allen finds sculptures amazing.

According to the information above, how much does the activity cost for them?

- A) \$100 B) \$250 C) \$200 D) \$150

6. Fatma has a dog named Olric, but she doesn't have enough time to take her dog for a walk. She uses the "FAME Walk" application. Thanks to this app, she finds a university student who will take her pet for a walk. Here is the app:

FAMEWalk

Your dog's name : Olric
Age : 1 year old
Habits : likes playing with balls

MAY

S	M	T	W	T	F	S
1	2	3	4	5	6	7
8	9	10	11	12	13	14
15	16	17	18	19	20	21
22	23	24	25	26	27	28
29	30	31				

TIME	PRICE
1 p.m.	2 p.m.
3 p.m.	4 p.m.
5 p.m.	6 p.m.
7 p.m.	8 p.m.

PRICE
<input type="checkbox"/> 40 minutes \$20
<input type="checkbox"/> 45 minutes \$25
<input checked="" type="checkbox"/> 60 minutes \$50

For details

According to the information above, - - - -.

- A) Olric will walk with a university student on May 13 B) the walk will take half an hour
C) Fatma will pay \$25 for 45 minutes D) Olric will go out in the morning

7.

For the experiment, you need a flower, food coloring and 1 or 2 mugs of water. Firstly, decide on the color of the flower. Then, pour some water into the mugs. Add the food coloring. Next, stir them for a while. Finally, put the flower into the water. You'll see that the color of the flower is changing day by day.

It's clear from the text that - - - .

- A) children can do this experiment easily

C) it is about some tips to make your flowers grow better

B) it is a recipe for a delicious vegetable dish

D) it is hard to change the color of a flower

8.

You are going to text a message to your friend because you want to learn the place of his birthday party.

Which of the following is the message that you will send your friend?

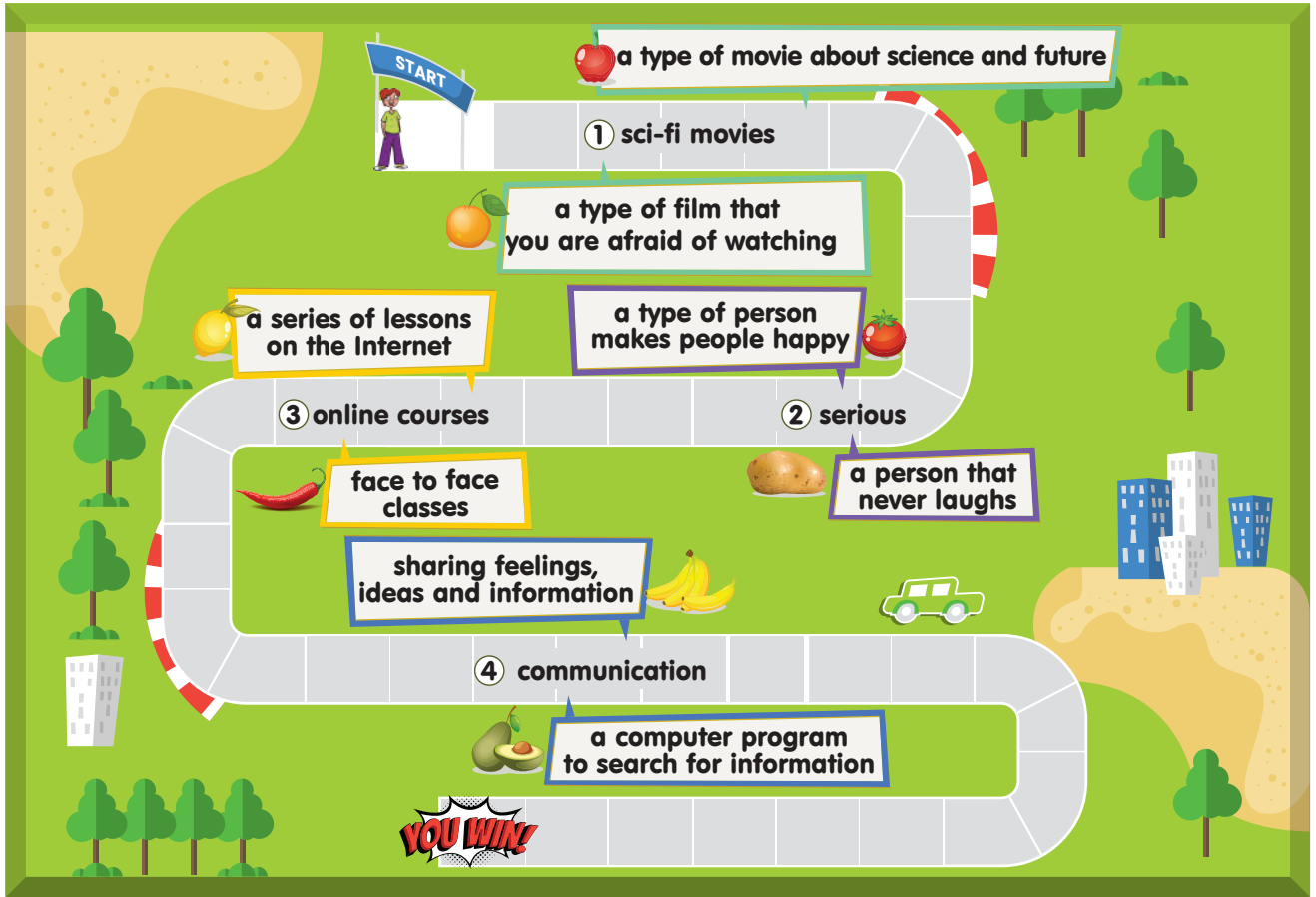
- A)

B)

C)

D)

9. Francis is playing an online game about English words and their definitions. He needs to collect the correct fruit and vegetables to win the ticket.



Which of the following **SHOULD** Francis choose to win the ticket?

- A)
- B)
- C)
- D)

10. The Hakeko family is in the kitchen. They are going to try a new recipe.



Which of the following cooking ways is suitable for all the members of the family?

- A) Roasting
B) Frying
C) Grilling
D) Boiling

Ad Soyad : _____

1	A	B	C	D
2	A	B	C	D
3	A	B	C	D
4	A	B	C	D
5	A	B	C	D

6	A	B	C	D
7	A	B	C	D
8	A	B	C	D
9	A	B	C	D
10	A	B	C	D

Optik No : 1119